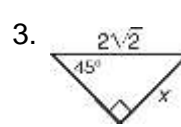
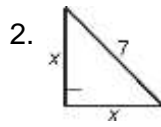
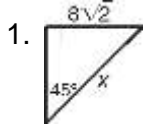
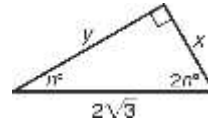
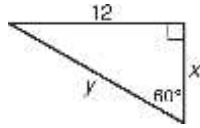
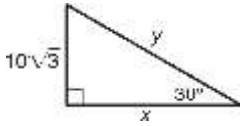


Special Right Triangles Homework

Find the value of x in each figure. Give your answer in simplest radical form.



Find the values of x and y . Give your answers in simplest radical form.



4. $x = \underline{\hspace{2cm}}$ $y = \underline{\hspace{2cm}}$ 5. $x = \underline{\hspace{2cm}}$ $y = \underline{\hspace{2cm}}$ 6. $x = \underline{\hspace{2cm}}$ $y = \underline{\hspace{2cm}}$

Find the value of x . Give your answers in simplest radical form.

